


Arrays and Multiplication


Write a multiplication sentence for each array.

1.




$$\underline{\quad} \times \underline{\quad} = \underline{\quad}$$

2.



$$\underline{\quad} \times \underline{\quad} = \underline{\quad}$$

3.



$$\underline{\quad} \times \underline{\quad} = \underline{\quad}$$

Draw an array to show each multiplication fact. Write the product.

4. $2 \times 8 = \underline{\quad}$

5. $3 \times 6 = \underline{\quad}$

6. **Model** Paula arranged her stamps in an album. The album has 3 rows with 7 stamps in each row. How many stamps does Paula have? Draw an array to solve your problem.

7. Jonathan is arranging 36 pictures, with 9 pictures in each row. How many rows will there be?

A 9

B 5

C 4

D 2