

Name \_\_\_\_\_

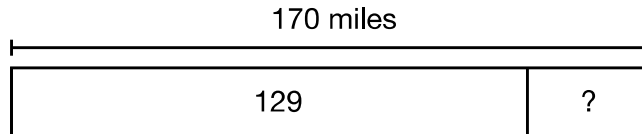
Reteaching

**3-13**

# Problem Solving: Draw a Picture and Write a Number Sentence

The distance from Cleveland, OH, to Pittsburgh, PA, is 129 miles. Detroit, MI, is 170 miles away from Cleveland. How much closer is Cleveland to Pittsburgh than to Detroit?

You can subtract to find how many miles closer Cleveland is to Pittsburgh than to Detroit.



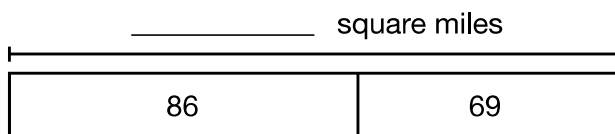
$$\begin{array}{r} 170 \\ - 129 \\ \hline 41 \end{array}$$

Cleveland is 41 miles closer to Pittsburgh than to Detroit.

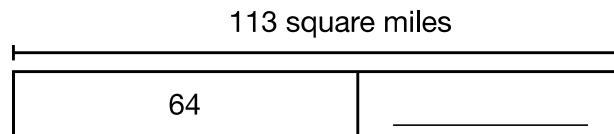
You can estimate  $170 - 130 = 40$  to show that the answer is reasonable.

Solve.

- Honolulu, HI, has an area of 86 square miles. Corpus Christi, TX, has an area that is 69 square miles greater than the area of Honolulu. How many square miles is Corpus Christi?



- Bakersfield, CA, has an area of 113 square miles. Its area is 64 square miles greater than the area of Anaheim, CA. What is the area, in square miles, of Anaheim?



- Writing to Explain** How did you know which operation to use to solve Problem 2?

---



---



---