

Choose the best answer.

1. **Mental Math** New York City has an area of 303 square miles. Philadelphia has an area of 135 square miles. How many more square miles does New York City have than Philadelphia?

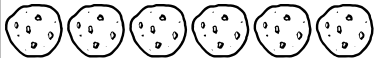



- A 278
- B 268
- C 178
- D 168

2. Which sentence is true?

- A $473 > 522 - 40$
- B $563 > 357 + 210$
- C $635 = 558 + 80$
- D $712 > 542 + 150$

3. Use the pictograph. Who sold the most boxes of cookies?

Boxes of Cookies Sold

Hector	
Savannah	
Tamra	
Ervin	

- A Savannah
- B Hector
- C Ervin
- D Tamra

At the school fair, each game costs 3 tickets. Miriam tried to figure out how many games she could play with 18 tickets.

Miriam's Work

Tickets	Games
3	1
6	2
9	3
11	4
13	5
15	6
17	7

seven games and one ticket left over

4. Miriam's work is incorrect. Rewrite the table and fill in the correct numbers for each column.

5. Write $300 + 70 + 9$ in standard form.
