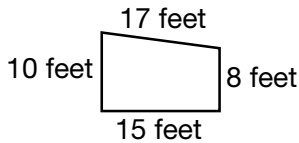


1. Mrs. Ross baked 8 bags of muffins for the school bake sale. Each bag had 6 muffins in it. How many muffins did Mrs. Ross bake?

- A 40
- B 46
- C 48
- D 56

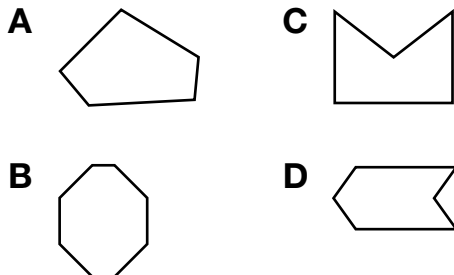
2. **Mental Math** The diagram shows Lyle's backyard.



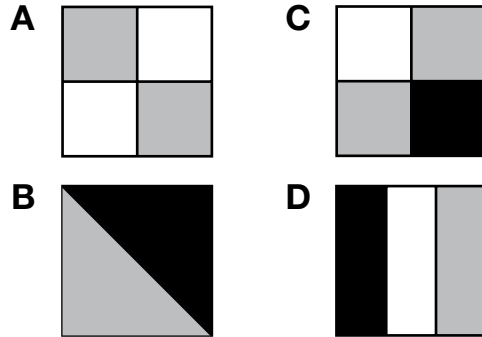
Lyle wants to put a fence around his backyard. How many feet of fencing does he need?

- A 33
- B 50
- C 55
- D 60

3. Jackson is missing a puzzle piece that is shaped like a hexagon. Which could be Jackson's puzzle piece?



4. Jessica made a quilt square that is $\frac{1}{3}$ white. Which quilt square is $\frac{1}{3}$ white?



5. Richard has 24 blocks. He is using all of his blocks to make a building. He uses 4 blocks for each floor. How many floors will Richard's building have?

- A 8
- B 6
- C 5
- D 4

6. Draw two different types of quadrilaterals. Explain how they are different.
