

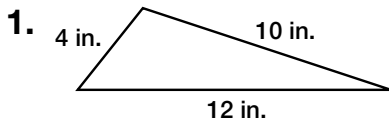
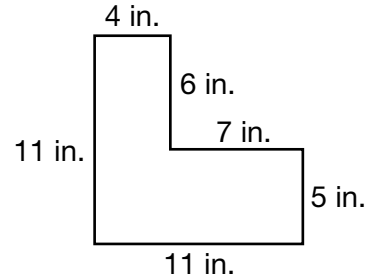
Understanding Perimeter

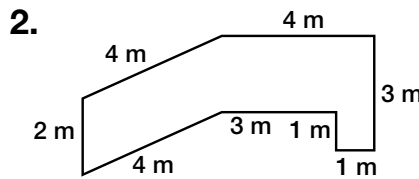
The **perimeter** of a figure is the distance around it.

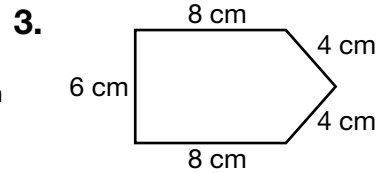
The perimeter is found by adding the lengths of the sides.

$$4 \text{ in.} + 6 \text{ in.} + 7 \text{ in.} + 5 \text{ in.} + 11 \text{ in.} + 11 \text{ in.} = 44 \text{ in.}$$

The perimeter of the figure is 44 inches.

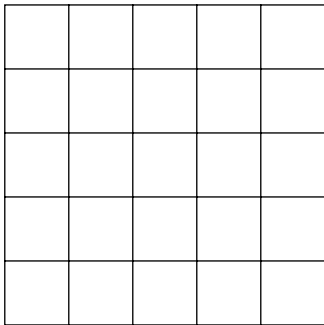







Draw a figure with the given perimeter.

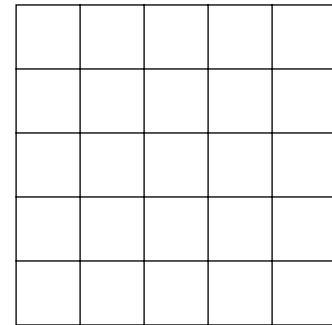
4. 6 units



5. 10 units



6. 12 units



7. A rectangle has a length of 5 yards and a width of 3 yards. What is its perimeter? Explain your answer.
